



a place of mind

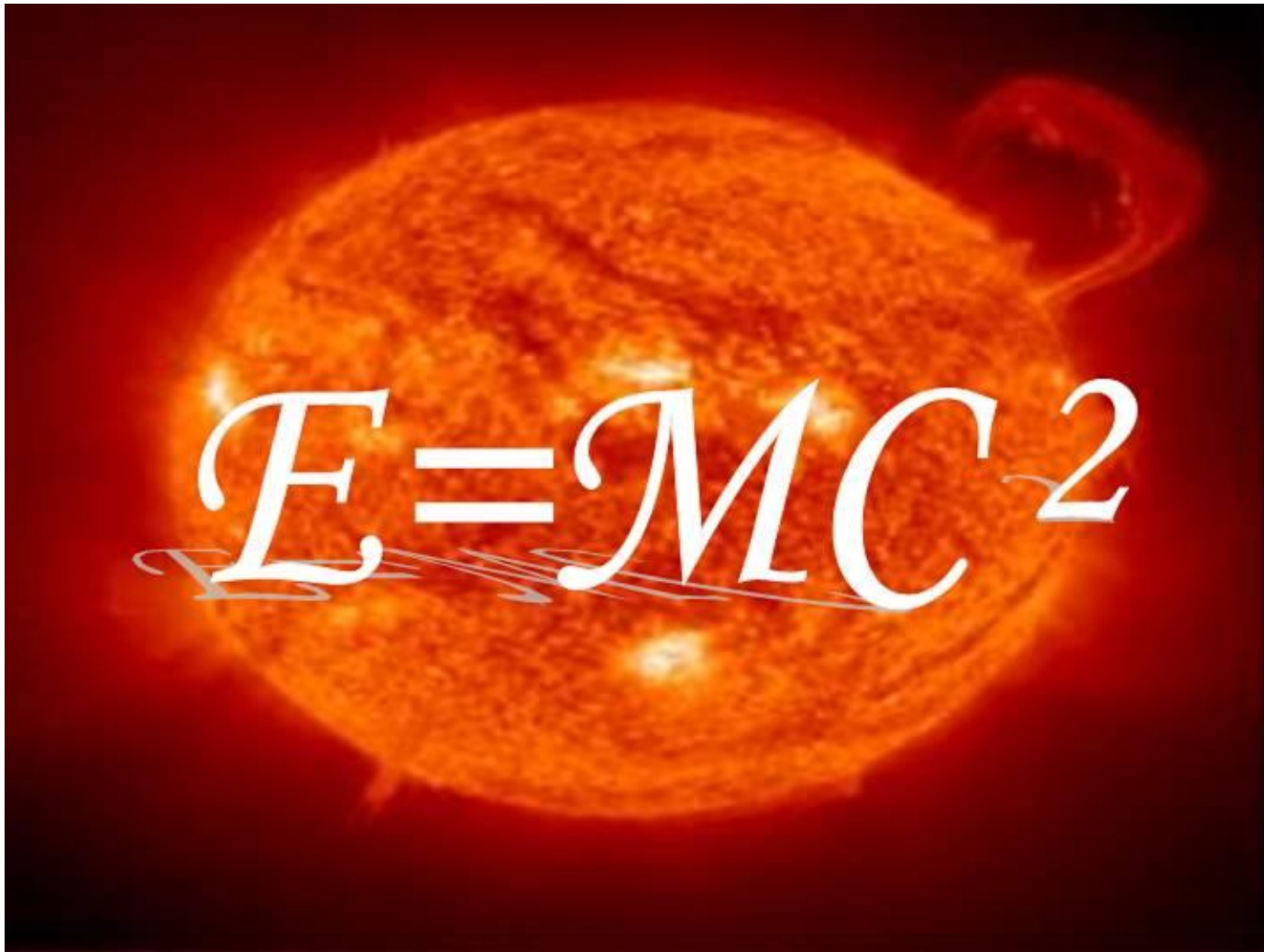
FACULTY OF EDUCATION

Department of  
Curriculum and Pedagogy

# Energy Problems

Science and Mathematics  
Education Research Group

# Energy Problems



# Energy Problems

The following questions have been compiled from a collection of questions submitted on PeerWise (<https://peerwise.cs.auckland.ac.nz/>) by teacher candidates as part of the EDCP 357 physics methods courses at UBC.

# Energy Problems I

An object is lifted to some height and then dropped. During the drop, which of the following is increased?

Neglect air resistance.

- A. Kinetic energy only
- B. Gravitational potential energy only
- C. Kinetic energy and total mechanical energy
- D. Kinetic energy and gravitational potential energy
- E. None of the above

# Solution

**Answer:** A

**Justification:** Total mechanical energy is the sum of all energy. In this question, it is the sum of kinetic and potential energies because the air resistance is neglected. Due to the conservation of energy, the sum of kinetic and potential energies is the same throughout the drop of the object.

As the object falls down, its velocity increases due to gravity. So, its kinetic energy increases. On the other hand, its height from the ground decreases so the potential energy decreases. Overall, the sums of kinetic and potential energies at any height during the drop are the same.

Therefore, the total mechanical energy stays the same, the kinetic energy increases and the gravitational potential energy decreases. Thus, the answer is kinetic energy only which is option **A**.

# Energy Problems II

Which of the following statements is TRUE?

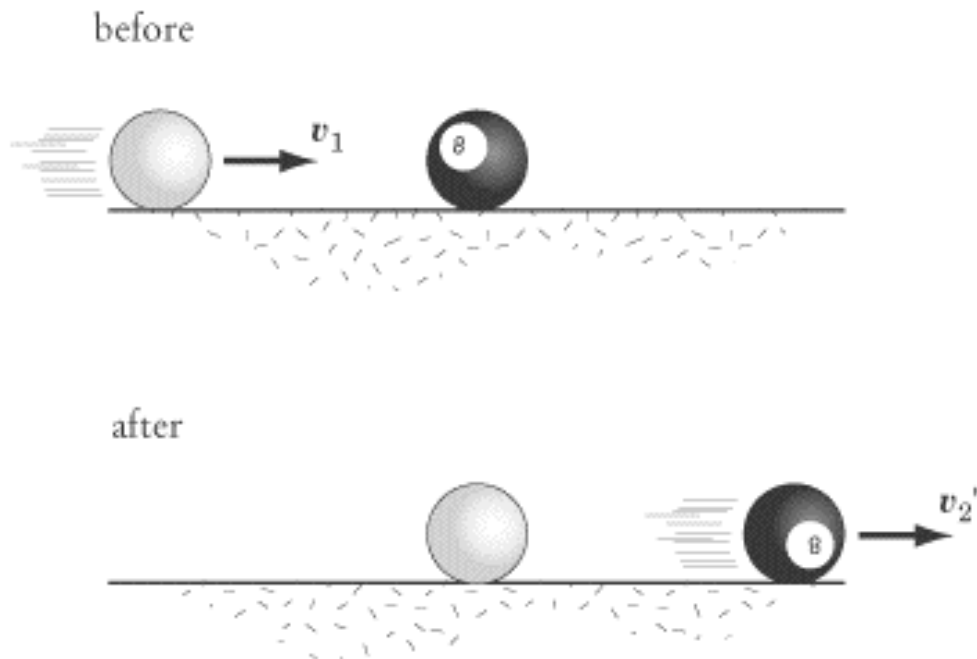
- A. In an elastic collision kinetic energy is conserved but momentum of the system is not
- B. In an inelastic collision kinetic energy is conserved but momentum of the system is not
- C. In an elastic collision kinetic energy is lost through temporary deformation of the objects
- D. In an inelastic collision kinetic energy is lost but momentum of the system is conserved
- E. In either type of collision kinetic energy is always conserved

# Solution

**Answer: D**

**Justification:** The concepts involved in this question are:

1) In an elastic collision kinetic energy is conserved due to the temporary deformation of the objects. This occurs in cases such as billiard ball collisions during a pool game, as seen here:



# Solution continued

2) In an inelastic collision total energy is still conserved but some kinetic energy is lost and transformed into energy in the form of sound, thermal energy, or permanent deformation of the objects. An example of this is can be observed in the case of a car collision, where there is a large sound and the car body is deformed upon impact.

3) Momentum is conserved in both elastic and inelastic collisions.

**A)** Incorrect - disagrees with statement 3

**B)** Incorrect - disagrees with statements 2 and 3

**C)** Incorrect - disagrees with statement 1

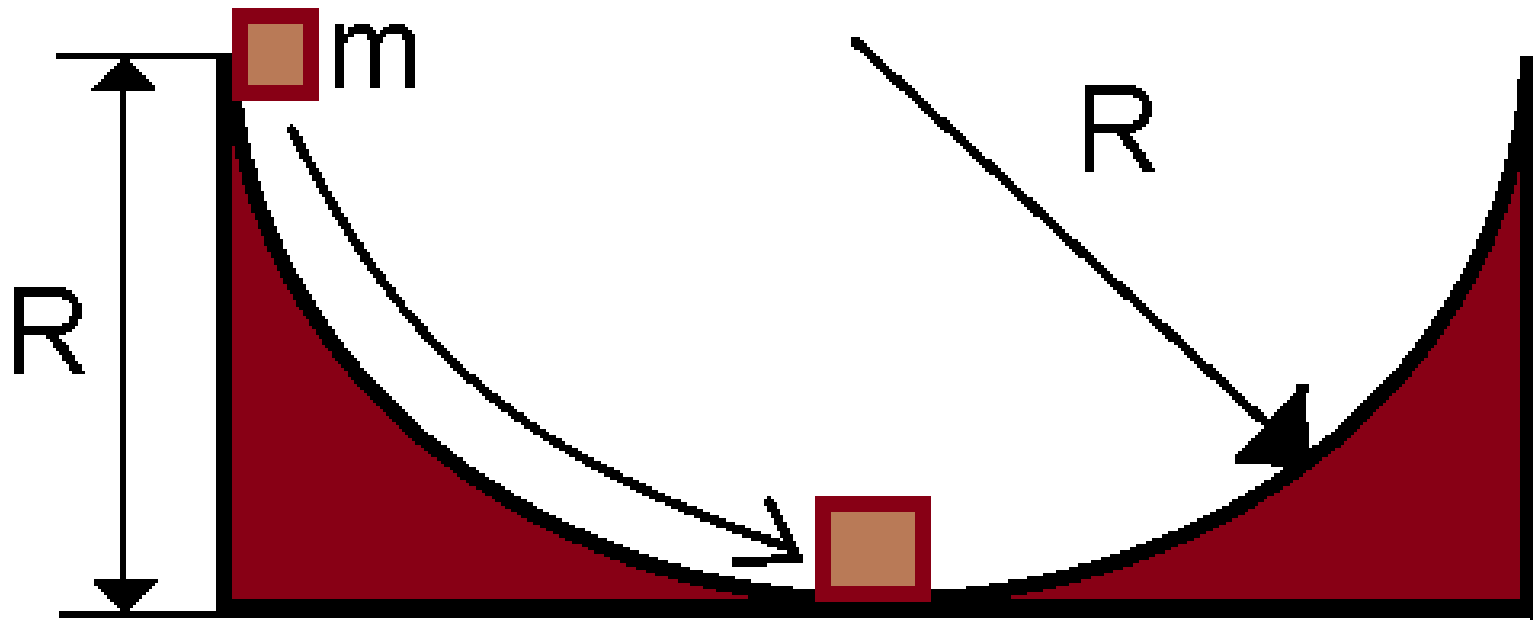
**D)** Correct - agrees with statements 2 and 3

**E)** Incorrect - disagrees with statement 2



# Energy Problems III

A block of mass  $m$  is released from rest at the top of a semi-circular frictionless track of radius  $R$ .



# Energy Problems III

## continued

Which of the following expressions most accurately represents the speed of the block at the bottom of the track?

$g$  is the acceleration due to gravity.

A.  $v^2 = \frac{g^2}{R}$

B.  $v^2 = 2gR$

C.  $v = mgR$

D.  $v = \frac{2mg}{R}$

# Solution

**Answer:** B

**Justification:** To solve this problem we need to use the conservation of energy.

At the top of the track, the block has potential energy of:  $E_P = mgR$

Since it is stationary at the top of the track, it has no kinetic energy and therefore the total mechanical energy of the block is equal to  $E_P$ .

At the bottom of the track, the block has kinetic energy of:  $E_K = \frac{1}{2}mv^2$

Since we have used the bottom of the track to represent ground zero, the block has no potential energy at this point, and therefore the total mechanical energy of the block is equal to  $E_K$ .

Since the track is frictionless, the only energies we are dealing with are Kinetic and Potential energy. Therefore no energy is lost due to heat or friction, so the total mechanical energy will be the same at the top and bottom of the track.

# Solution continued

Therefore:

$$E_K = E_P$$

$$\frac{1}{2}mv^2 = mgR$$

$$\frac{1}{2}v^2 = gR$$

$$v^2 = 2gR \quad (\text{answer } \mathbf{B})$$

This problem can be solved more quickly, however, by considering the units of the answers:

**A** has units for  $v$  of  $\frac{\sqrt{m}}{s^2}$ , which is incorrect for speed

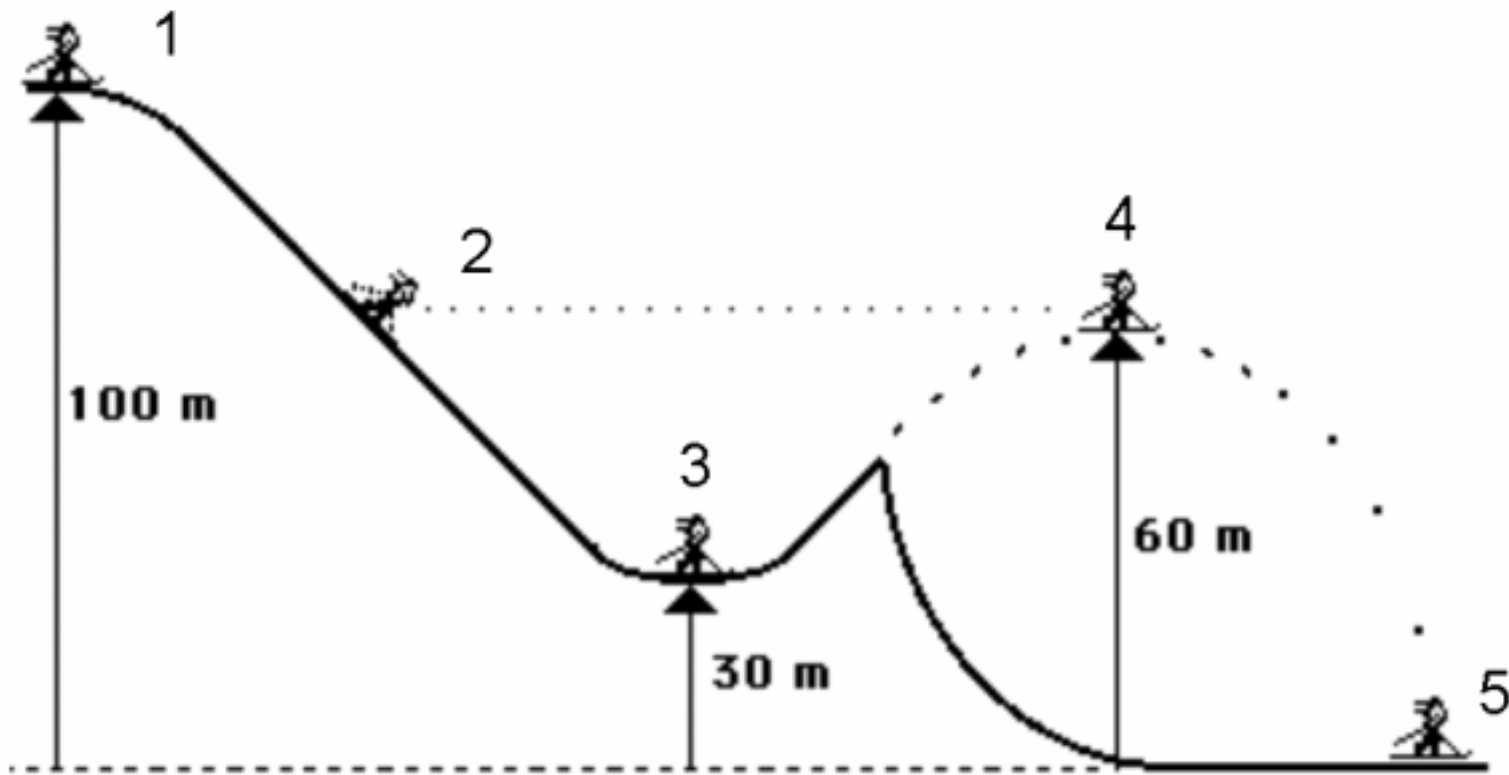
**B** has units for  $v$  of  $\frac{m}{s}$ , which is **correct** for speed

**C** has units for  $v$  of  $\frac{kg \cdot m^2}{s^2}$ , which is incorrect for speed

**D** has units for  $v$  of  $\frac{kg}{s^2}$ , which is incorrect for speed

# Energy Problems IV

A 50kg ski jumper skis down a frictionless slope as shown below. The skier is stationary at point 1.



# Energy Problems IV

## continued

At which point is the following true?

$$E_K = \frac{2}{3} E_P$$

Where:

$E_K$  = Skier's kinetic energy

$E_P$  = Skier's gravitational potential energy, relative to the bottom of the slope

- A. 1
- B. 2
- C. 3
- D. 4
- E. Both 2 and 4

# Solution

**Answer:** E

**Justification:** This problem can be solved numerically by calculating the gravitational potential energy at each of the five points using:  $E_p = mgh$

For the numbers 1 through 5 we would get the  $E_p$  to be 50kJ, 30kJ, 15kJ, 30kJ, and 0kJ respectively.

Since we know that at point 1, the skier has no velocity (and therefore no kinetic energy  $E_K$ ), then the total mechanical energy is equal to  $E_p$  at that point (50kJ). Due to the lack of friction, we know that the total mechanical energy will be equal at all points of the skier's trajectory, and that no energy will be converted into heat due to friction. Therefore we can calculate  $E_K$  at points 1 through 5 by subtracting  $E_p$  from the total mechanical energy – and so we get  $E_K$  to be 0kJ, 20kJ, 35kJ, 20kJ, and 50kJ respectively.

# Solution continued

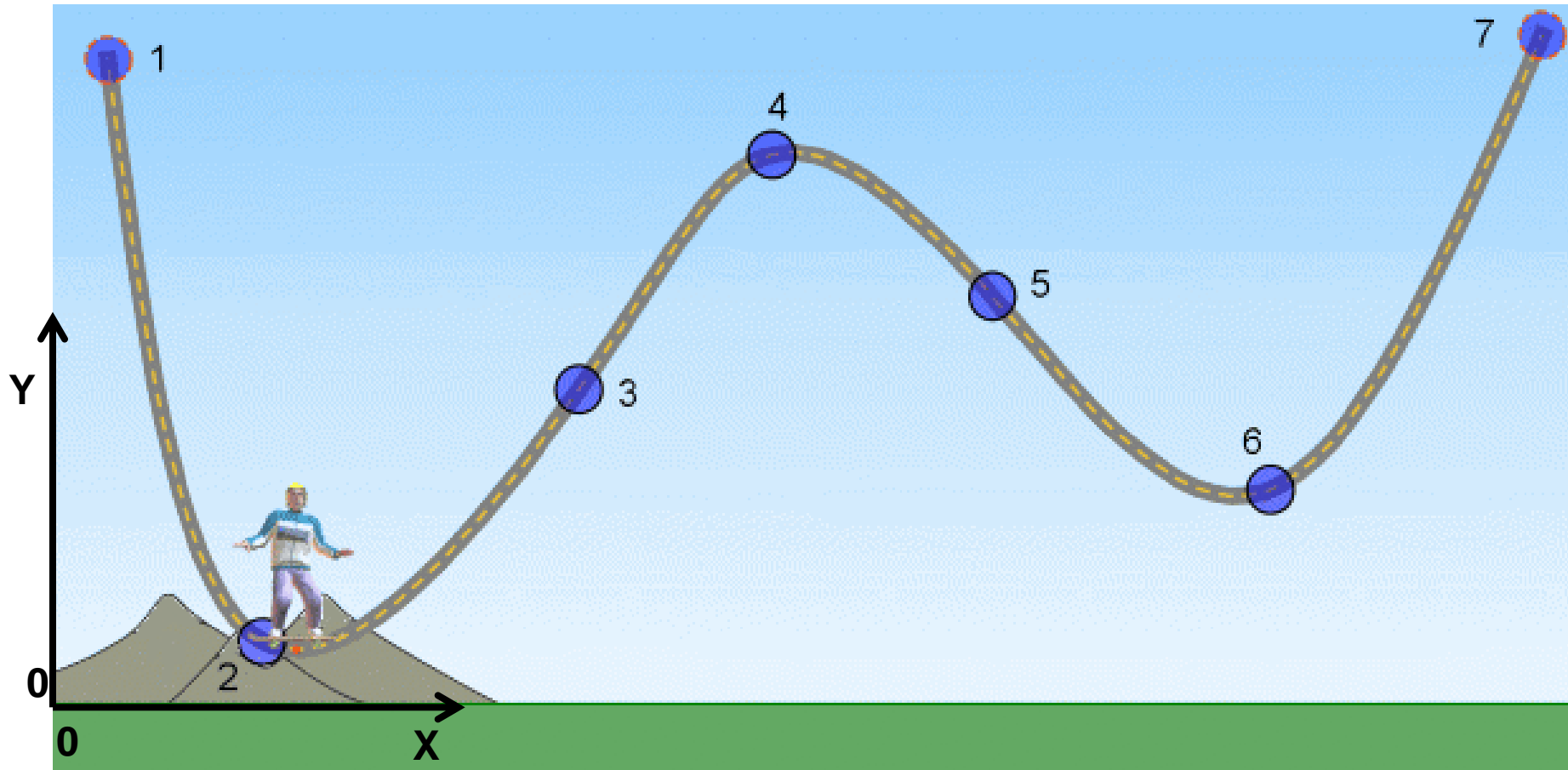
From there we can calculate the ratios between  $E_P$  and  $E_K$ , and we will find that  $E_K = \frac{2}{3}E_P$  at points 2 and 4 (answer **E**).

However, this question is easier to solve if we see that neither potential nor kinetic energy can be zero. Therefore we can rule out point 1 (answer **A**), since  $E_K$  is zero at this point. We can also see that for the ratio to hold true,  $E_P > E_K$ , and therefore the skier must still be more than halfway up the slope. Therefore we can rule out answer **C**. Since points 2 and 4 are on the same elevation (60m), the answer must be **E**.



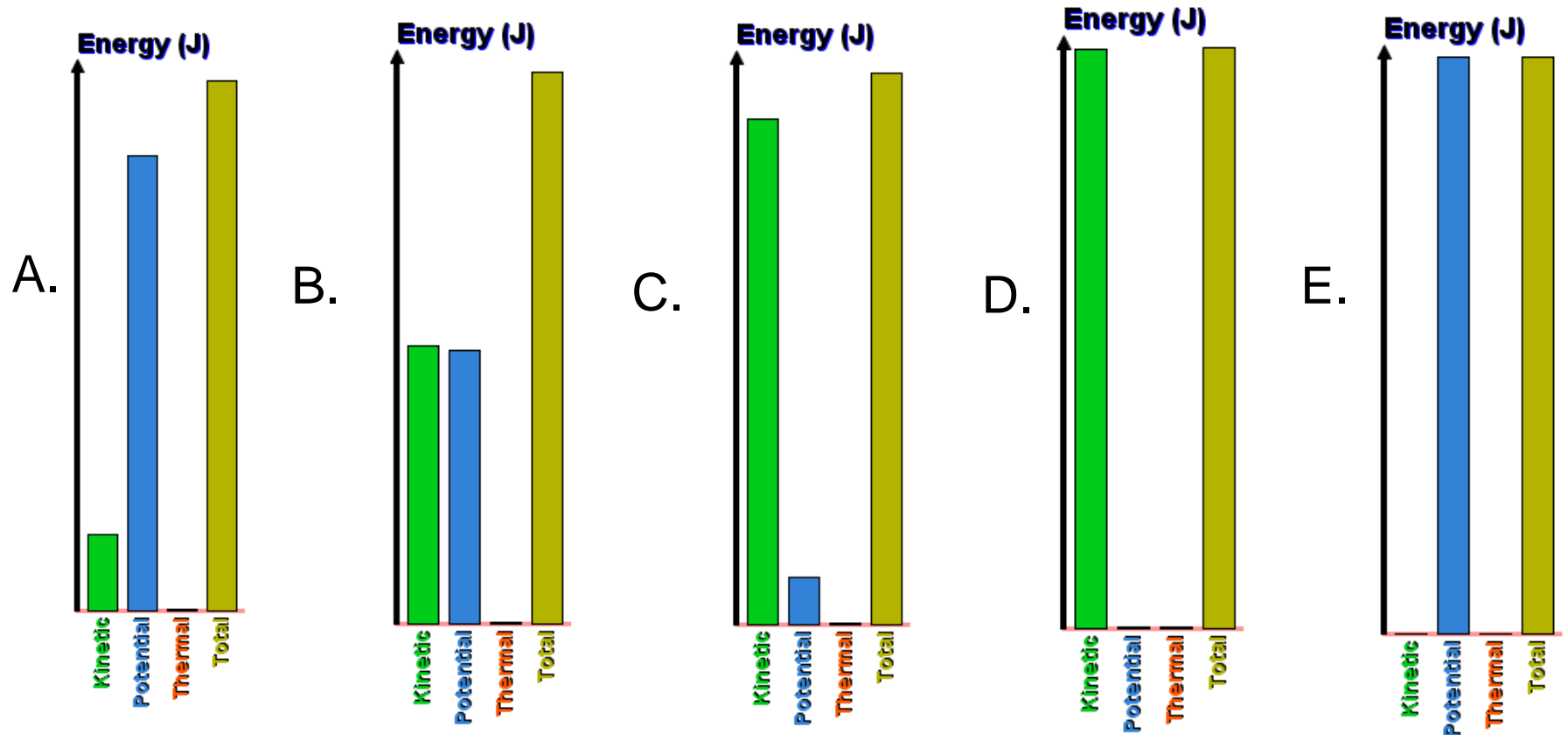
# Energy Problems V

A total radical skater dude is doing sweet tricks on an epic (frictionless) skate track.



# Energy Problems V continued

If he starts from rest at point 1, which graph represents his  $E_P$  and  $E_K$  best at point 2?



# Solution

**Answer:** C

**Justification:** As the skater descends the track, his initial potential energy is converted without loss (no friction) into kinetic energy.

As point 2 is the lowest point on the track, the skater will have maximum kinetic energy at this point, so you may be tempted to select option D, which shows 0% potential energy, and 100% kinetic energy. However, point 2 is not at ground level, which is the point of reference for calculating potential energy (using the axes provided), and so the skater will still have some potential energy. Thus, D is incorrect.

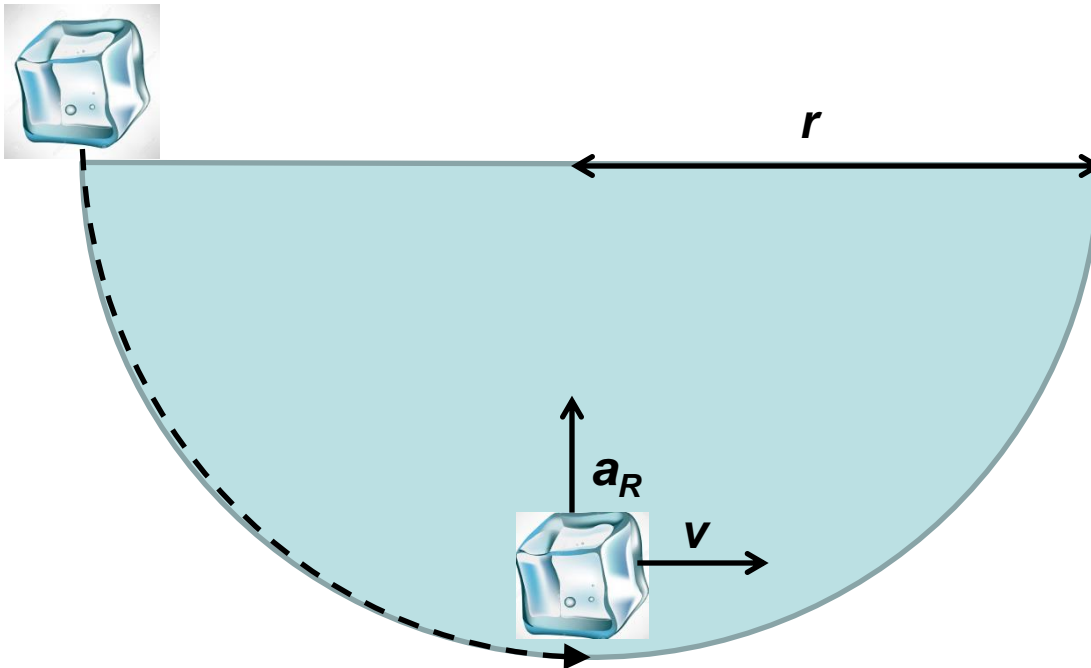
As the skater is clearly closer to the ground than to the top of the track, his  $E_K$  will be greater than his  $E_P$ , so A and B are incorrect. He is also very obviously not at the top of the track, so he will have at least some  $E_K$ , so E is also incorrect.

Thus, **C** must be the right answer, with  $E_K > E_P$ , but  $E_P > 0$ .

# Energy Problems VI

An ice cube of mass  $m$  is placed on the rim of a hemispherical glass bowl of radius  $r$  and then released to slide inside it.

$\mathbf{v}$  is the tangential velocity of the ice cube at the bottom of the bowl, and  $\mathbf{a}_R$  is its radial acceleration.



# Energy Problems VI

## continued

What are  $v^2$  and  $a_R$  of the ice cube as it reaches the bottom of the bowl (point 1)?

$g$  is the acceleration due to gravity.

- A.  $v^2 = gr$  and  $a_R = g$
- B.  $v^2 = 2gr$  and  $a_R = 2g$
- C.  $v^2 = \frac{1}{2}gr$  and  $a_R = \frac{1}{2}mg$
- D.  $v^2 = 2gr$  and  $a_R = 2mg$
- E.  $v^2 = \frac{1}{2}gr$  and  $a_R = \frac{1}{2}g$

# Solution

**Answer:** B

**Justification:** To solve this question we can use the conservation of mechanical energy (here we are assuming there is no friction between the block of ice and the bowl). At the rim of the bowl, the ice cube possesses only potential energy ( $E_P$ ), and no kinetic energy ( $E_K$ ). If we take the bottom of the bowl to be our zero ground, then at the bottom of the bowl the ice cube possesses only  $E_K$  and no  $E_P$ . Therefore the potential energy of the ice cube at the bowl rim is entirely converted to kinetic energy at the bottom. We can express this using formulas:

*Potential energy at the rim:*

$$E_P = mgr$$

*Kinetic energy at the bottom:*

$$E_K = \frac{1}{2}mv^2$$

$$\text{Therefore: } E_P = E_K \rightarrow mgr = \frac{1}{2}mv^2 \rightarrow gr = \frac{1}{2}v^2 \rightarrow v^2 = 2gr$$

# Solution continued

To solve for the radial acceleration, we use the following formula:

$$a_R = \frac{v^2}{r} = \frac{2gr}{r} = 2g$$

Therefore the answer is  $v^2 = 2gr$  and  $a_R = 2g$  (answer **B**)

Notice here that we did not need to make use of the mass of the ice block ( $m$ ). In fact, we could have easily ruled out options C and D by realizing that the units for  $a_R$  are in  $\text{kg}\cdot\text{m}/\text{s}^2$ , which is the unit for force, and not acceleration.

# Energy Problems VII

A marble was released at height  $h$  and it gained a final velocity of  $v$  at the bottom of the frictionless slide. If the same marble in the diagram below is released from rest at  $\frac{1}{2}h$ , what would be its new final velocity in terms of  $v$  at the bottom of the slide?

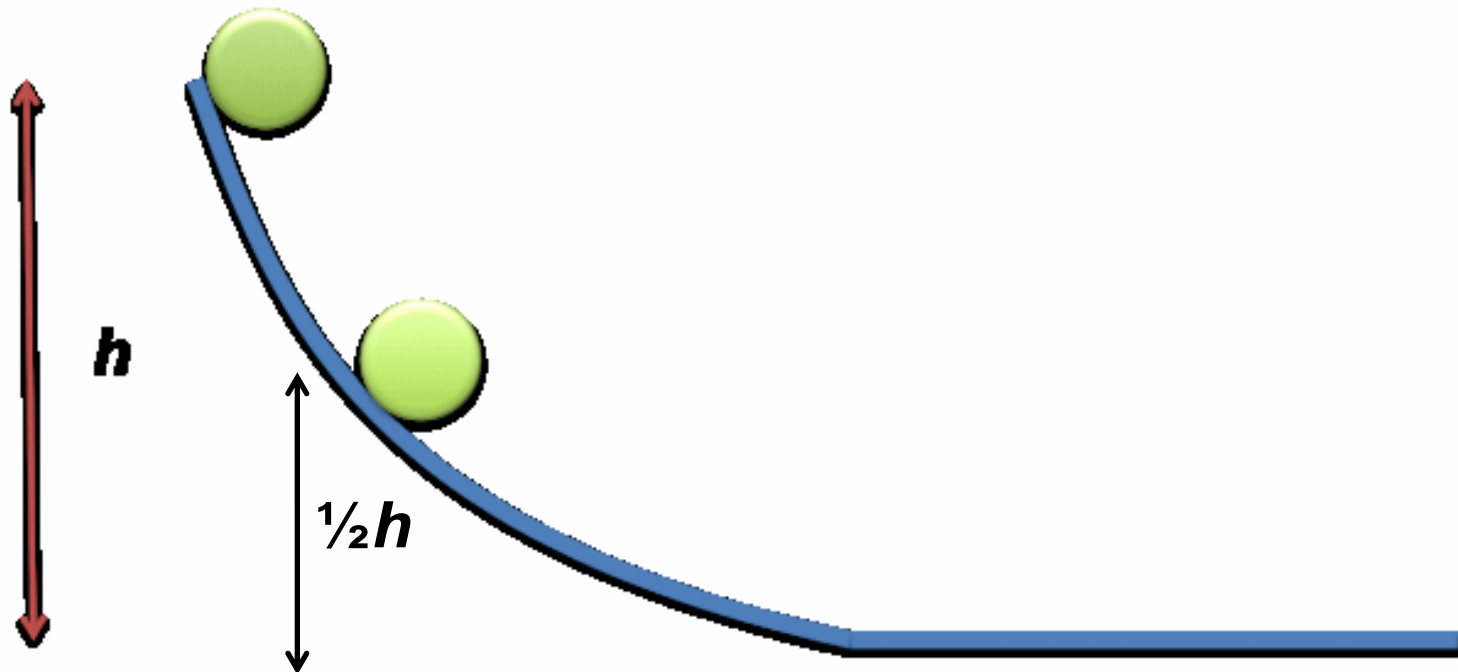
A.  $v^2$

B.  $\frac{1}{2}v^2$

C.  $\frac{v}{\sqrt{2}}$

D.  $\frac{v}{2}$

E.  $\frac{v}{4}$





# Solution

**Answer:** C

**Justification:** To solve this question we can use the conservation of mechanical energy (the slide is frictionless and therefore no energy is converted into heat energy).

**Situation 1:** At the top of the slide, the marble possesses only potential energy ( $E_P$ ), and no kinetic energy ( $E_K$ ). If we take the bottom of the slide to be our zero ground, then at the bottom of the slide the marble possesses only  $E_K$  and no  $E_P$ . Therefore the potential energy of the marble at the top of the slide is entirely converted to kinetic energy at the bottom. We can express this using formulas:

$$E_{K_1} = E_{P_1}$$
$$\frac{1}{2}mv^2 = mgh$$
$$v^2 = 2gh$$

# Solution continued

Now we can look at the situation where the marble starts halfway down the slide (at  $\frac{1}{2}h$ ). In this case we will also get conservation of mechanical energy:

$$\begin{aligned}E_{K_2} &= E_{P_2} \\ \frac{1}{2}mv_2^2 &= mg\left(\frac{1}{2}h\right) \\ v_2^2 &= gh\end{aligned}$$

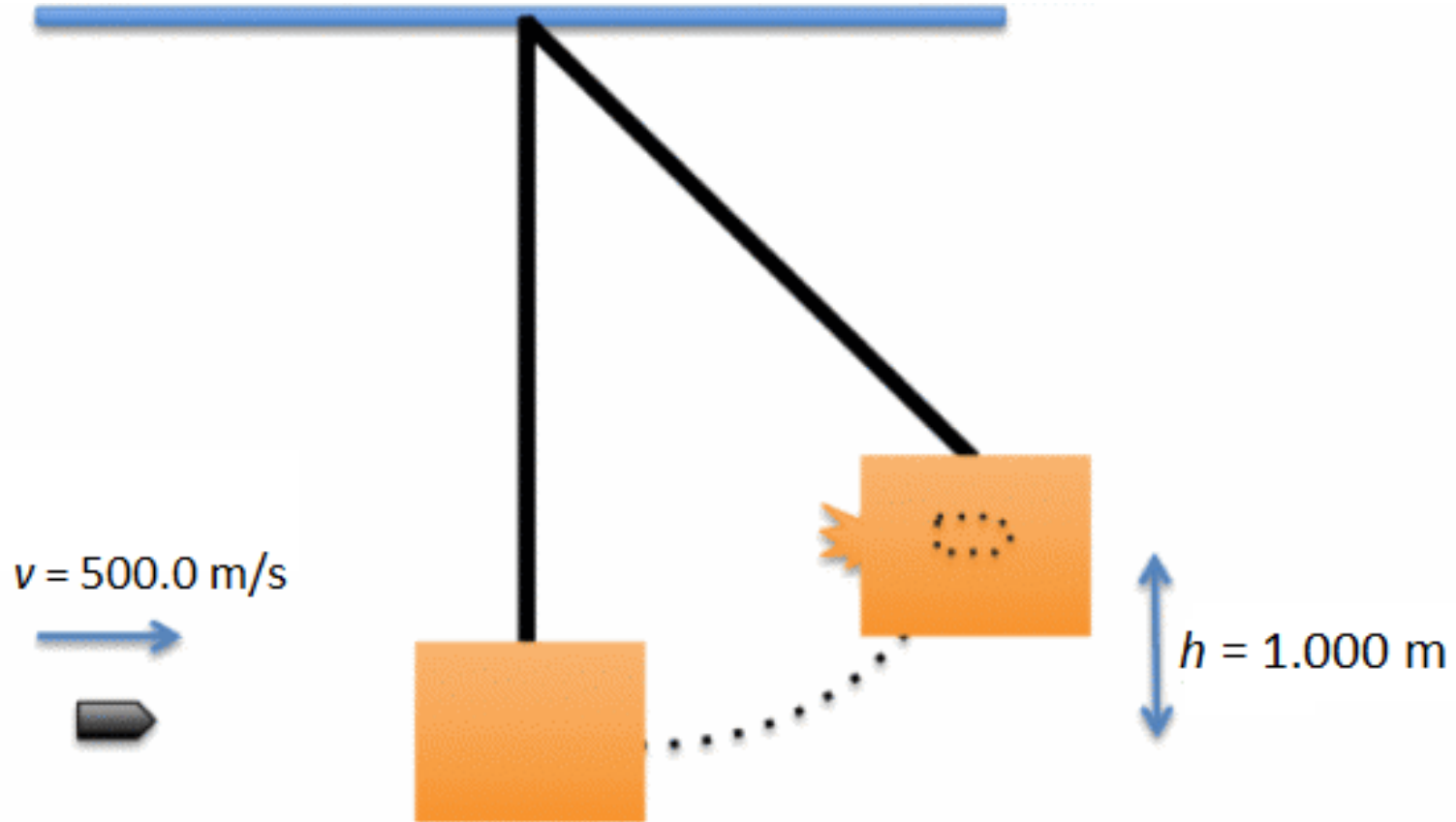
Since we know that the original velocity  $v = 2gh$ , we can express the new velocity  $v_2$  in terms of  $v$ :

$$v_2^2 = gh = \frac{1}{2}(2gh) = \frac{1}{2}v^2 = \frac{v^2}{2}$$

Therefore:  $v_2 = \frac{v}{\sqrt{2}}$  (answer **C**)

# Energy Problems VIII

A 9.000 g bullet is shot into a  $5.000 \times 10^{-1}$  kg crate hanging on the wall. As a result, the crate swings up a maximum height of 1.000 m with the bullet embedded inside the crate.



# Energy Problems VIII

## continued

Which of the following statements is **FALSE**?

- A. The bullet has a kinetic energy of 1125 J.
- B. The tension in the string did 0 J of work.
- C. All the bullet's kinetic energy was converted into the gravitational potential energy.
- D. Some of the bullet's kinetic energy was converted into heat energy as the crate stopped the bullet.

# Solution

**Answer:** C

**Justification:** If we take the initial height of the bullet and crate as the zero ground, then we can say that the potential energy ( $E_p$ ) of the system was zero before the bullet hit the crate. Since the crate was stationary, the only energy of the system before the collision was the kinetic energy ( $E_K$ ) of the bullet. We can calculate this energy:

$$E_{K_{bullet}} = \frac{1}{2} m v^2 = \frac{1}{2} (0.009 \text{ kg})(500.0 \text{ m/s})^2 = 1125 \text{ J}$$

**Note:** Don't forget to convert the 9.000 g into 0.009 kg

Therefore the total energy of the system before the collision is 1125 J.

After the collision, the crate reaches a height of 1.000 m. At the height of the swing, both the crate and the bullet are stationary, therefore they do not possess any kinetic energy. Therefore the total mechanical energy of the system can be represented by the potential energy of the crate and bullet at the maximum height of the swing.

# Solution continued

We can calculate this potential energy:

$$E_{P_{crate\&bullet}} = mgh = (0.5 \text{ kg} + 0.009 \text{ kg})(9.8 \text{ m/s}^2)(1.000 \text{ m}) = 4.988 \text{ J}$$

**Note:** Don't forget to add the mass of the crate and bullet together

Therefore the total mechanical energy (potential plus kinetic) of the system after the collision is only 4.988 J. But we know that the bullet supplied a kinetic energy of 1125 J to the system, therefore the rest of the energy must have been converted into heat energy or energy of deformation as the bullet struck the crate.

Now we can look at the answers individually and see which ones are true and false (remember that we are looking for the **false** answer):

**A)** This is true as we have calculated it ( $E_{kbullet} = 1125 \text{ J}$ )

**B)** Since the tension in the string is perpendicular to the motion of the crate, it has no component in the direction of the crate's motion and therefore did 0 J of work. Therefore this answer is true.

## Solution continued 2

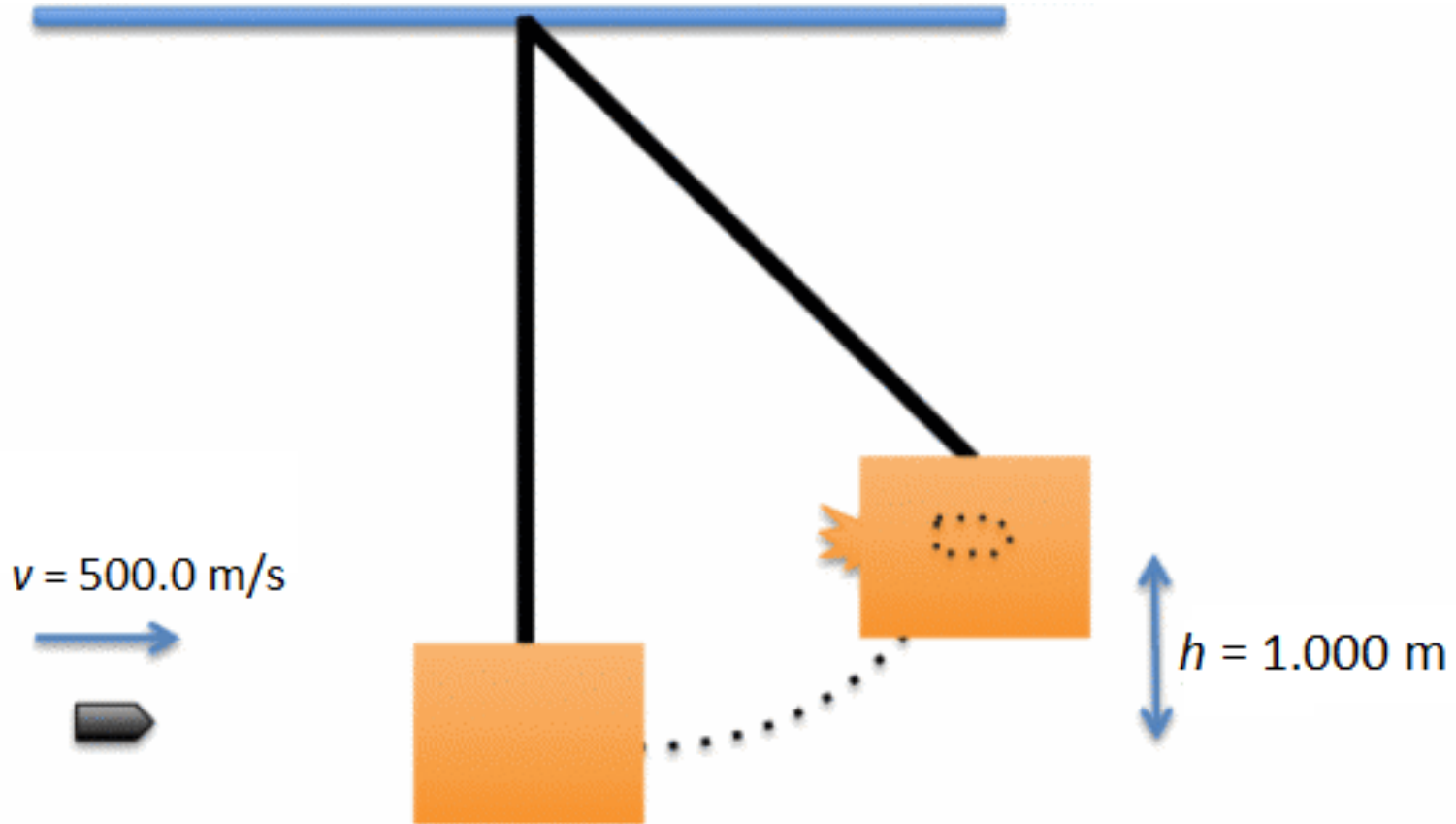
**C)** Since we know that a large proportion of the kinetic energy of the bullet was 'lost' during the collision, we know that not all of the bullet's kinetic energy was converted to gravitational potential energy. Therefore this answer is **false**.

**D)** We know that a large amount of the bullet's initial kinetic energy was converted to other forms of energy during the collision, therefore this answer is true.

Since **C** is the only answer which is **false**, it is the correct answer.

# Energy Problems IX

A 9.000 g bullet is shot into a  $5.000 \times 10^{-1}$  kg crate hanging on the wall. As a result, the crate swings up a maximum height of 1.000 m with the bullet embedded inside the crate.





# Energy Problems IX

## continued

If all the lost kinetic energy was converted into thermal energy heating up the wooded crate, what is the final temperature of the wood crate if it was initially at room temperature (20.00 °C)?

The specific heat capacity of wood is  $1700 \text{ J.kg}^{-1}.\text{°C}^{-1}$ .

The acceleration due to gravity is  $9.8 \text{ m/s}^2$ .

- A. 20.00 °C
- B. 21.26 °C
- C. 21.29 °C
- D. 21.32 °C

# Solution

**Answer:** D

**Justification:** If we take the initial height of the bullet and crate as the zero ground, then we can say that the potential energy ( $E_p$ ) of the system was zero before the bullet hit the crate. Since the crate was stationary, the only energy of the system before the collision was the kinetic energy ( $E_K$ ) of the bullet. We can calculate this energy:

$$E_{K_{bullet}} = \frac{1}{2} m v^2 = \frac{1}{2} (0.009 \text{ kg})(500.0 \text{ m/s})^2 = 1125 \text{ J}$$

**Note:** Don't forget to convert the 9.000 g into 0.009 kg

Therefore the total energy of the system before the collision is 1125 J. After the collision, the crate reaches a height of 1.000 m. At the height of the swing, both the crate and the bullet are stationary, therefore they do not possess any kinetic energy. Therefore the total mechanical energy of the system can be represented by the potential energy of the crate and bullet at the maximum height of the swing.

# Solution continued

We can calculate this potential energy:

$$E_{P_{crate\&bullet}} = mgh = (0.5 \text{ kg} + 0.009 \text{ kg})(9.8 \text{ m/s}^2)(1.000 \text{ m}) = 4.988 \text{ J}$$

**Note:** Don't forget to add the mass of the crate and bullet together

Therefore the total mechanical energy (potential plus kinetic) of the system after the collision is only 4.988 J. But we know that the bullet supplied a kinetic energy of 1125 J to the system, therefore the rest of the energy must have been converted into heat energy:

$$E_{K_{bullet}} = E_{P_{box\&bullet}} + \text{Heat energy lost}$$

$$1125 \text{ J} = 4.988 \text{ J} + \text{Heat energy lost}$$

$$\text{Therefore Heat energy lost} = 1120.012 \text{ J}$$

We can now use this to calculate by how much the temperature of the crate increased. To do this we will use the formula for heat capacity:

$Q = mc\Delta T$ , where  $Q$  is the heat energy,  $m$  is the mass of the crate,  $c$  is the specific heat capacity of wood, and  $\Delta T$  is the change in temperature

## Solution continued 2

$$Q = mc\Delta T = mc(T_f - T_i)$$

We know the initial temperature of the crate (20.00 °C), therefore:

$$Q = mc(T_f - T_i)$$

$$1120.012 \text{ J} = (0.500 \text{ kg})(1700 \text{ J} \cdot \text{kg}^{-1} \cdot ^\circ\text{C}^{-1})(T_f - 20.00 \text{ }^\circ\text{C})$$

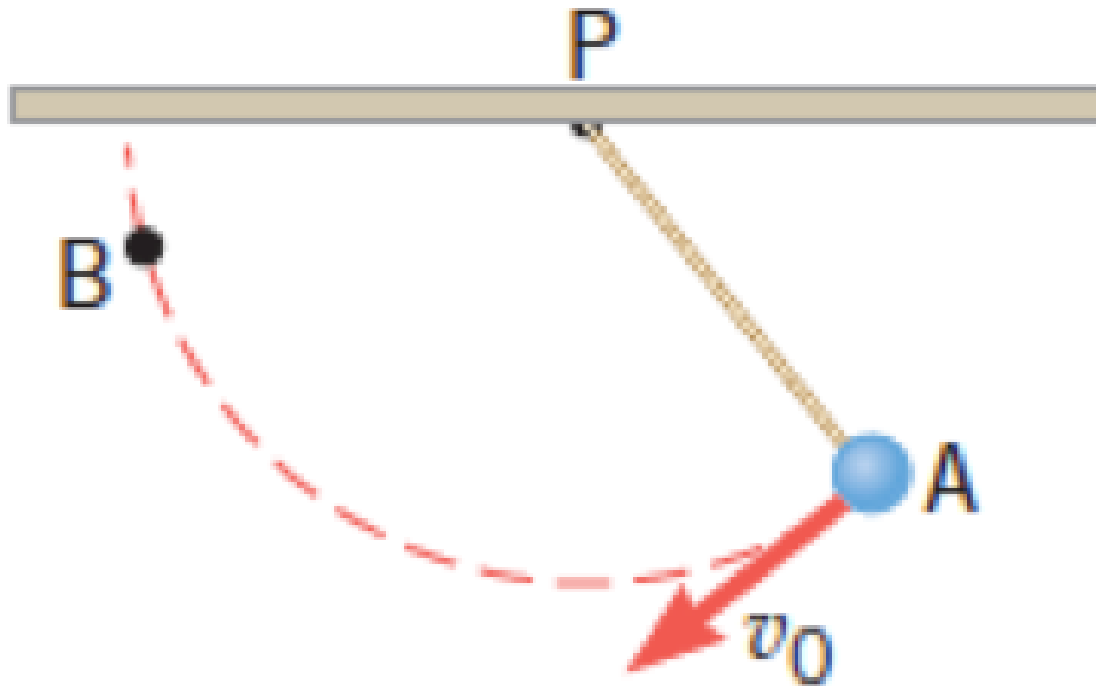
$$1.318 \text{ }^\circ\text{C} = (T_f - 20.00 \text{ }^\circ\text{C})$$

$$\textit{Therefore } T_f = 21.318 \text{ }^\circ\text{C} = 21.32 \text{ }^\circ\text{C}$$

Therefore the correct answer is **D**

# Energy Problems X

A ball is fixed to the end of a string, which is attached to the ceiling at point P. As the drawing shows, the ball is projected downward at A with the launch speed  $v_0$ . Traveling on a circular path, the ball comes to a halt at point B.



# Energy Problems X

## continued

What enables the ball to reach point B, which is above point A?  
Ignore friction and air resistance.

- A. The work done by the tension in the string.
- B. The ball's initial gravitational potential energy.
- C. The ball's initial kinetic energy.
- D. The work done by the gravitational force.

# Solution

**Answer:** C

**Justification:** This is a conservation of energy question. Since point B is above point A, the ball will have a greater gravitational potential energy at point B than point A. Therefore in order for energy to be conserved, the ball must have had some kinetic energy at point A (for example giving the ball a push), so that it will have the energy to reach point B. If we look at all the possible answers:

**A)** The work done by the tension in the string is zero because the tension force is perpendicular to the motion of the ball. Therefore this answer is **incorrect**.

**B)** Without an input of other energy, the ball does not have enough gravitational potential energy at point A to reach point B if it was just let go. Therefore this answer is **incorrect**.

# Solution continued


**C)** If you give the ball a push at point A instead of letting it go you would give it more kinetic energy, which will be converted into gravitational potential energy at point B. Therefore this answer is **correct**.

**D)** While the gravitational force would help the ball accelerate downwards, this will not necessarily help it reach point B since we know that at point B the ball will have more gravitational potential energy than at point A. Without giving the ball extra energy, the ball would only be able to reach the same height as it was at point A. Therefore this answer is **incorrect**.



# Energy Problems XI

A moving body of mass  $m$  collides with a stationary body of double the mass,  $2m$ , sticks to it and continues moving. What fraction of the original kinetic energy is lost?




- A.  $1/4$
- B.  $1/3$
- C.  $1/2$
- D.  $2/3$
- E.  $3/4$

# Solution

**Answer:** D

**Justification:** For this question we will need to use conservation of momentum to help determine how much kinetic energy was lost in the collision (this is an inelastic collision since kinetic energy was lost to heat/deformation/etc.).

Let us draw the picture again and add in all the values we need:



# Solution continued

Initially, the kinetic energy of the system is:  $E_{K_1} = \frac{1}{2}mv_1^2$

After the collision, the two bodies move as one with a speed of  $v_2$ .

Conservation of momentum would determine that:

$$p_{before} = p_{after}$$

$$mv_1 = (m + 2m)v_2 = 3mv_2$$

$$\text{Therefore } v_2 = \frac{v_1}{3}$$

Therefore the kinetic energy of the system after the collision is:

$$E_{K_2} = \frac{1}{2}(3m)v_2^2 = \frac{1}{2}(3m)\left(\frac{v_1}{3}\right)^2 = \frac{3}{2}m\left(\frac{v_1^2}{9}\right) = \frac{1}{6}mv_1^2$$

So the lost kinetic energy is:

$$E_{K_{lost}} = E_{K_1} - E_{K_2} = \frac{1}{2}mv_1^2 - \frac{1}{6}mv_1^2 = \frac{1}{3}mv_1^2$$

## Solution continued 2

Finally, we need to calculate the **fraction** of the original kinetic energy that was lost. We do this by dividing the amount that was lost by the original amount:

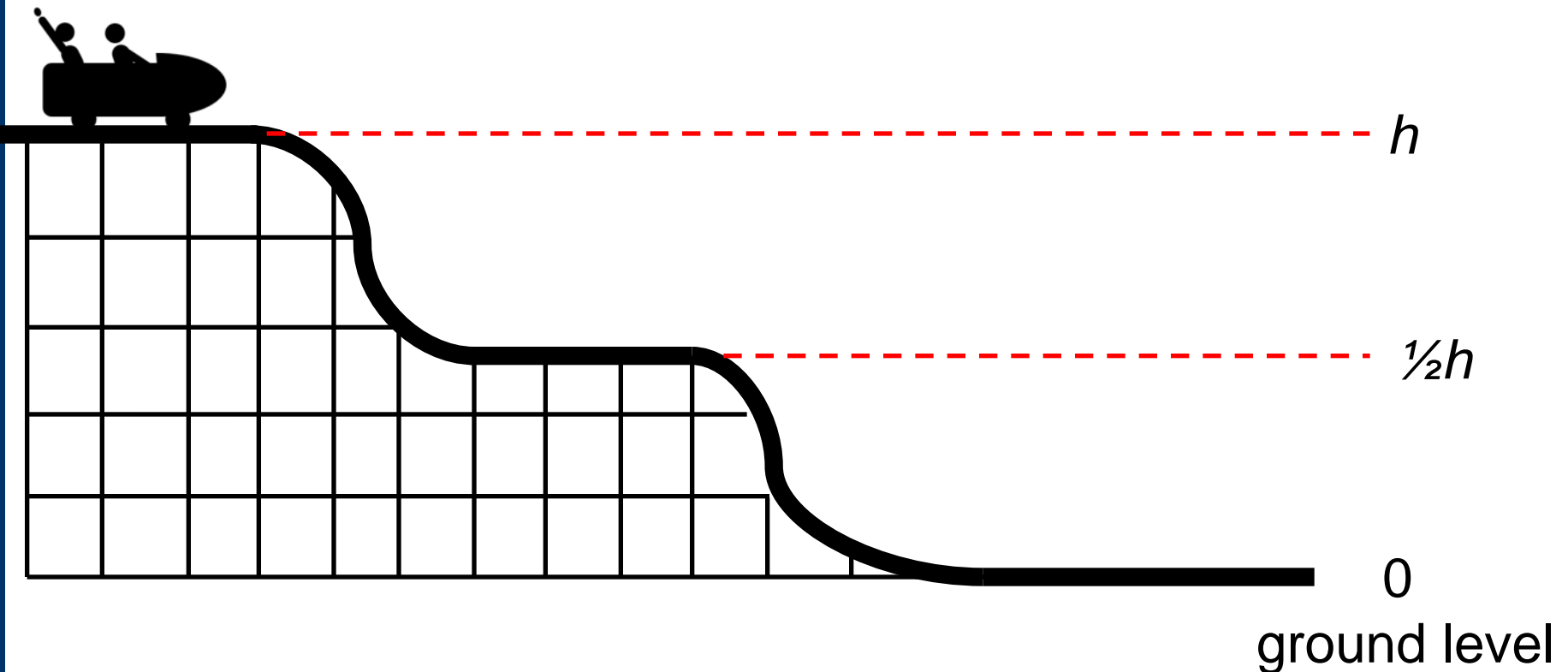
$$\frac{E_{K_{lost}}}{E_{K_1}} = \frac{\frac{1}{3} m v_1^2}{\frac{1}{2} m v_1^2} = \frac{2}{3} \quad (\text{answer D})$$

Most collisions are inelastic because kinetic energy is transferred to other forms of energy – such as thermal energy, potential energy, and sound – during the collision process.

A perfectly inelastic collision is one in which the maximum amount of kinetic energy has been lost during a collision, making it the most extreme case of an inelastic collision. In most cases, you can tell a perfectly inelastic collision because the objects in the collision "stick" together, sort of like a tackle in American football.

# Energy Problems XII

A frictionless roller coaster cart starts initially at height  $h$  with a speed of  $v = \sqrt{gh}$ .



# Energy Problems XII

## continued

The speeds of the rollercoaster cart at height  $h$ ,  $\frac{1}{2}h$  and at ground level can best be described by the ratio:

- A. 1:2:3
- B. 1:4:9
- C. 3:2:1
- D. 9:4:1
- E. 10:14:17

**Note:** Choose the **best** answer for the ratio of  $h:\frac{1}{2}h$ :ground level

# Solution

**Answer:** E

**Justification:** For this question we will need to use conservation of mechanical energy (the rollercoaster is frictionless so there is no energy converted to heat energy).

We can look at each different height of the rollercoaster separately and find out what the speed of the cart is at each level.

1) At height  $h$ :

We know that at this height the speed of the cart  $v = \sqrt{gh}$ .

We can also find out the total mechanical energy (kinetic plus potential) of the cart:

$$E_K + E_P = \frac{1}{2}mv^2 + mgh = \frac{1}{2}m(\sqrt{gh})^2 + mgh = \frac{1}{2}mgh + mgh = \frac{3}{2}mgh$$

# Solution continued

2) At height  $\frac{1}{2}h$ :

First we need to find out the total mechanical energy (kinetic plus potential) of the cart at  $\frac{1}{2}h$ :

$$E_K + E_P = \frac{1}{2}mv_{half}^2 + mg\left(\frac{1}{2}h\right) = \frac{1}{2}mv_{half}^2 + \frac{1}{2}mgh$$

Since total mechanical energy is conserved, we know that the total mechanical energy at height  $h$  is the same as at height  $\frac{1}{2}h$ :

$$\frac{1}{2}mv_{half}^2 + \frac{1}{2}mgh = \frac{3}{2}mgh$$

$$v_{half}^2 + gh = 3gh$$

$$v_{half}^2 = 2gh$$

$$v_{half} = \sqrt{2gh}$$

$$v_{half} = \sqrt{2}\sqrt{gh} = \sqrt{2}v \approx 1.4v$$



# Solution continued 2

3) At height 0 (ground level):

First we need to find out the total mechanical energy (kinetic plus potential) of the cart at ground level:

$$E_K + E_P = \frac{1}{2} m v_{ground}^2 + m g (0) = \frac{1}{2} m v_{ground}^2$$

Since total mechanical energy is conserved, we know that the total mechanical energy at height  $h$  is the same as at ground level:

$$\frac{1}{2} m v_{ground}^2 = \frac{3}{2} m g h$$

$$v_{ground}^2 = 3 g h$$

$$v_{ground} = \sqrt{3 g h}$$

$$v_{half} = \sqrt{3} \sqrt{g h} = \sqrt{3} v \approx 1.7 v$$

## Solution continued 2

Now we can compare the ratios of the speeds at  $h$ ,  $\frac{1}{2}h$  and ground level:

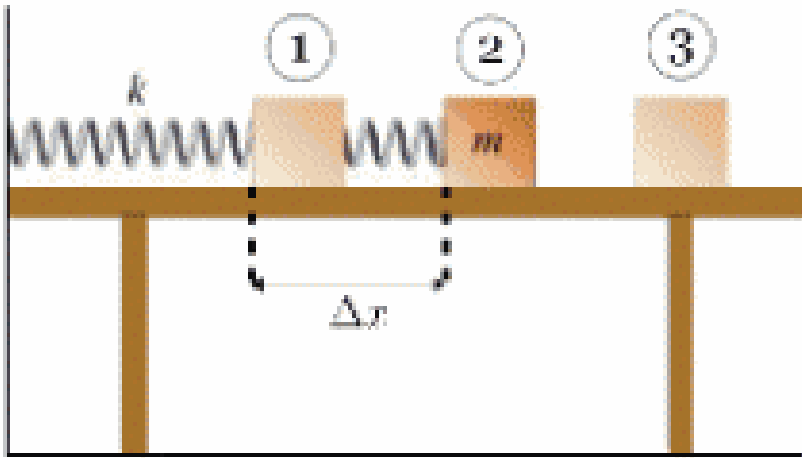
$$1 : 1,4 : 1,7$$

This ratio expressed to the nearest integer ratio is 10:14 :17

Therefore the correct answer is **E**.

# Energy Problems XIII

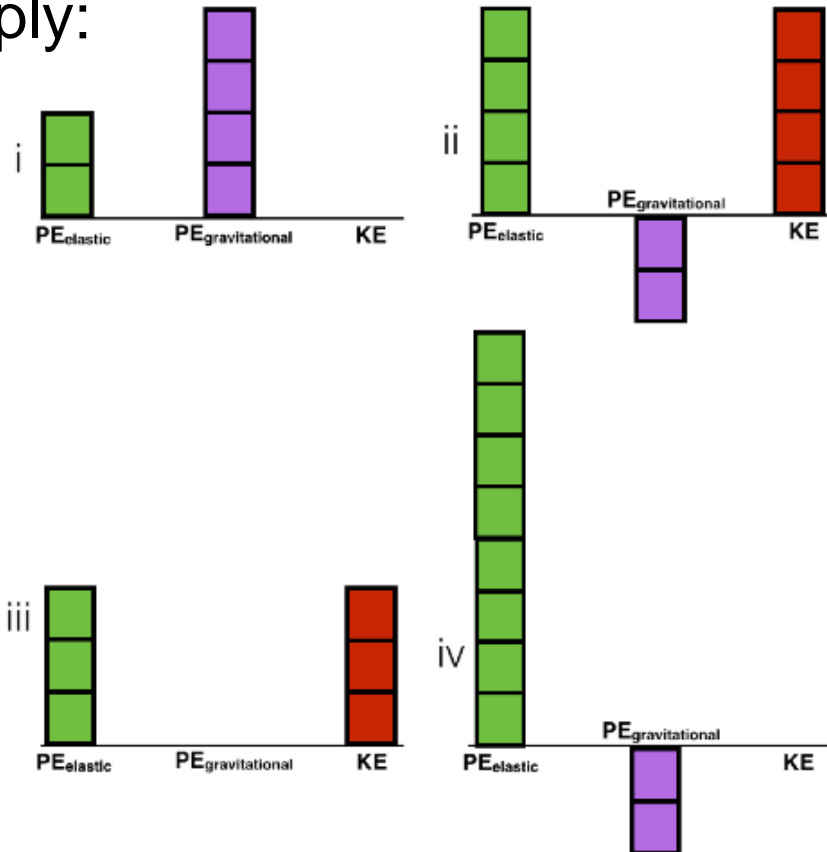
A spring is placed on a table and compressed past its equilibrium point by a distance of  $\Delta x$  as shown in the diagram below:



Assume that the spring is being held in place by an external force until time 1, which is the instant that this force is removed from the mass (this is the moment before the mass starts moving due to the expansion of the spring). At time 1 the system begins with exactly **6 J** of energy.

# Energy Problems XIII continued

Based on the diagram what are possible representations of the energy distribution of the system at **time 1**? Choose *all* that apply:



**Note:** Each block represents 1 J of energy, blocks above the line are positive energies and blocks below the line are negative energies

- A. i only
- B. ii only
- C. i & iv
- D. ii & iv
- E. iii only

# Solution

**Answer:** C

**Justification:** To answer this question we need to identify the possible  $PE_{elastic}$  (potential elastic energy),  $PE_{gravitational}$  (potential gravitational energy) and  $KE$  (kinetic energy) at time 1.

$PE_{elastic}$ : The spring is compressed by  $\Delta x$  and therefore there is potential energy stored in the spring.  $PE_{elastic} = \frac{1}{2}\Delta x^2$ . This means that  $PE_{elastic}$  must be greater than zero (because  $\Delta x^2$  is squared).

$PE_{gravitational}$ : The potential energy due to gravity depends on where you choose the origin to be. Therefore,  $PE_{gravitational}$  can be negative, zero or positive because  $PE_{gravitational} = mgh$ , where  $h$  depends on where the origin is **chosen** to be.

If the origin is **above** the table  $PE_{gravitational} < 0$ , if the origin is **along** the table  $PE_{gravitational} = 0$ , and if the origin is **below** the table  $PE_{gravitational} > 0$ .

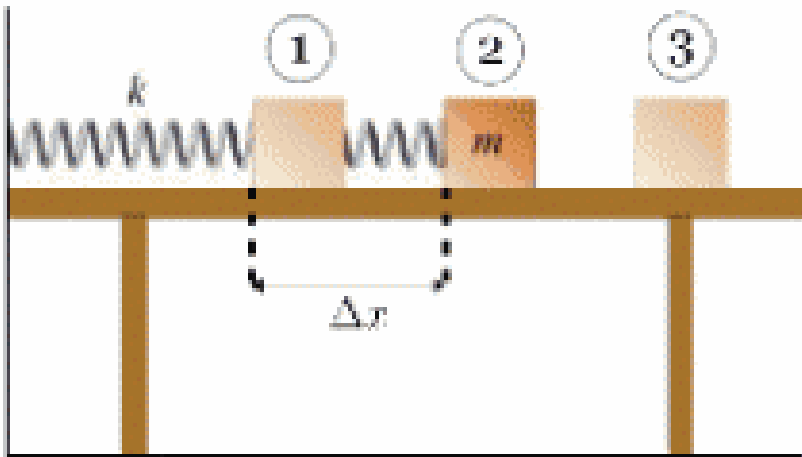
# Solution continued

*KE*: The equation for the kinetic energy of an object is  $KE = \frac{1}{2}mv^2$ . At time 1 we know that the initial velocity is zero (the mass has not started moving yet), therefore this must mean that  $KE = 0$ .

If we look at the possible options for the energy distribution of the system at time 1, we can see that all satisfy the condition that there are 6J of energy in the system. We can discount options (ii) and (iii) since they show a positive amount of kinetic energy, and we know this must be zero. Both options (i) and (iv) have positive  $PE_{elastic}$ , which we know must be true. Option (i) has positive  $PE_{gravitational}$ , while option (iv) has negative  $PE_{gravitational}$ . Since we know  $PE_{gravitational}$  can be both positive and negative, both options (i) and (iv) could be true. Therefore the correct answer is **C**.

# Energy Problems XIV

A spring is placed on a table and compressed past its equilibrium point by a distance of  $\Delta x$  as shown in the diagram below:

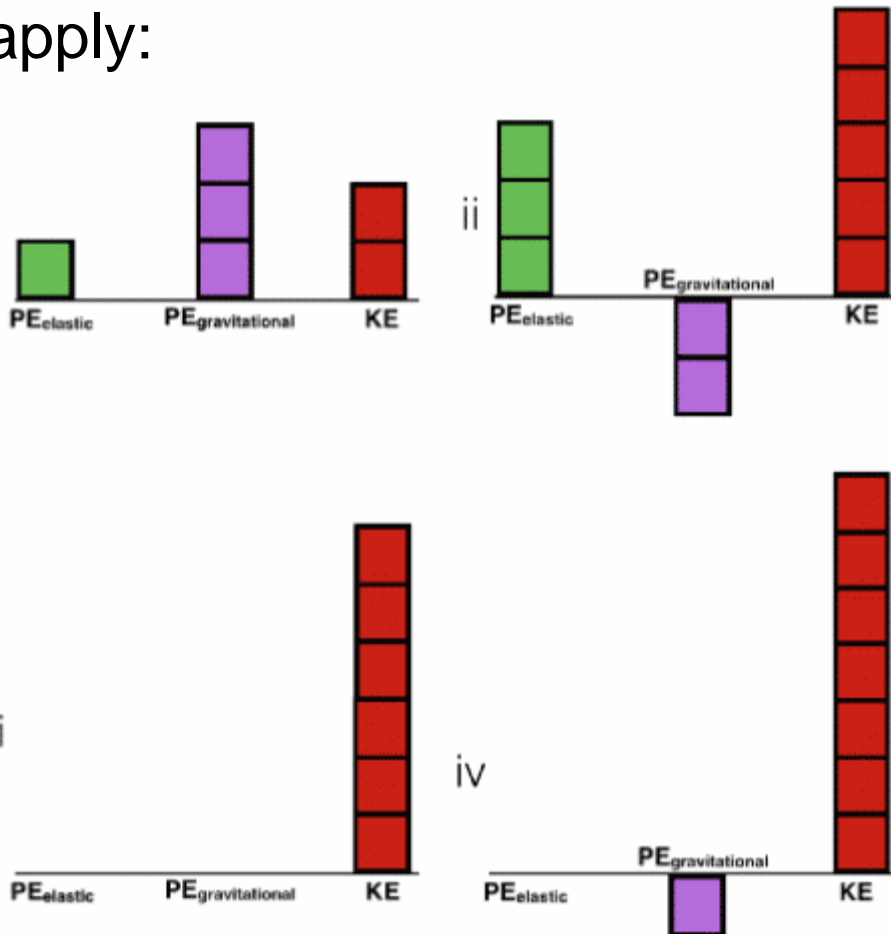


Assume that the spring is being held in place by an external force until time 1, which is the instant that this force is removed from the mass. At time 1 the system begins with exactly **6 J** of energy. Time 2 is the moment when the spring and the mass lose contact (this is when the spring reaches its equilibrium length).

# Energy Problems XIV continued

Based on the diagram what are possible representations of the energy distribution of the system at **time 2**? Choose *all* that apply:

**Note:** Each block represents 1 J of energy, blocks above the line are positive energies and blocks below the line are negative energies



- A. i only
- B. iii only
- C. i & ii
- D. iii & iv
- E. iii only



# Solution

**Answer:** D

**Justification:** To answer this question we need to identify the possible  $PE_{elastic}$  (potential elastic energy),  $PE_{gravitational}$  (potential gravitational energy) and  $KE$  (kinetic energy) at time 2.

$PE_{elastic}$ : At time 2 the spring is no longer compressed and  $\Delta x = 0$ .  
Therefore  $PE_{elastic} = \frac{1}{2}\Delta x^2 = 0$ .

$PE_{gravitational}$ : The potential energy due to gravity depends on where you choose the origin to be. Therefore,  $PE_{gravitational}$  can be negative, zero or positive because  $PE_{gravitational} = mgh$ , where  $h$  depends on where the origin is **chosen** to be.

If the origin is **above** the table  $PE_{gravitational} < 0$ , if the origin is **along** the table  $PE_{gravitational} = 0$ , and if the origin is **below** the table  $PE_{gravitational} > 0$ .

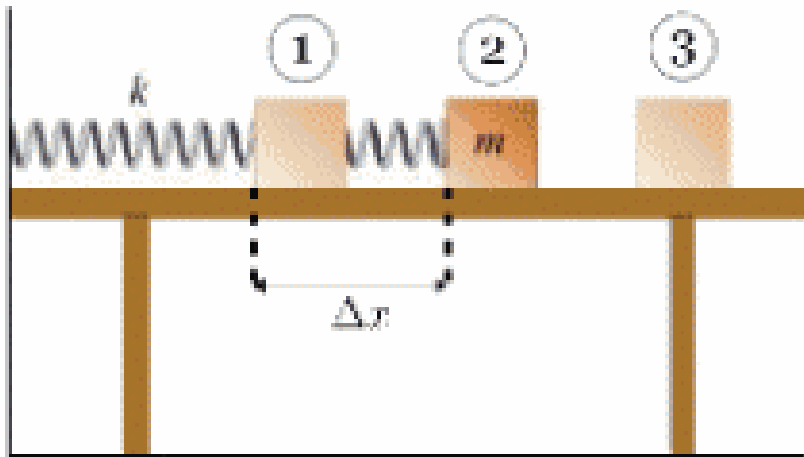
# Solution continued

*KE*: Here we know that the velocity of the object is **not** zero. The equation for the kinetic energy of an object is  $KE = \frac{1}{2}mv^2$ . We know that for this case all the terms in this equation must be greater than zero (mass cannot be negative and velocity is squared). This means that the kinetic energy must be **greater** than zero.

If we look at the possible options for the energy distribution of the system at time 1, we can see that all satisfy the condition that there are 6J of energy in the system. We can discount options (i) and (ii) since they show a positive amount of  $PE_{elastic}$ , and we know this must be zero. Both options (iii) and (iv) have positive kinetic energy, which we know must be true. Option (iii) has zero  $PE_{gravitational}$ , while option (iv) has negative  $PE_{gravitational}$ . Since we know  $PE_{gravitational}$  can be both zero and negative, both options (iii) and (iv) could be true. Therefore the correct answer is **D**.

# Energy Problems XV

A spring is placed on a table and compressed past its equilibrium point by a distance of  $\Delta x$  as shown in the diagram below:

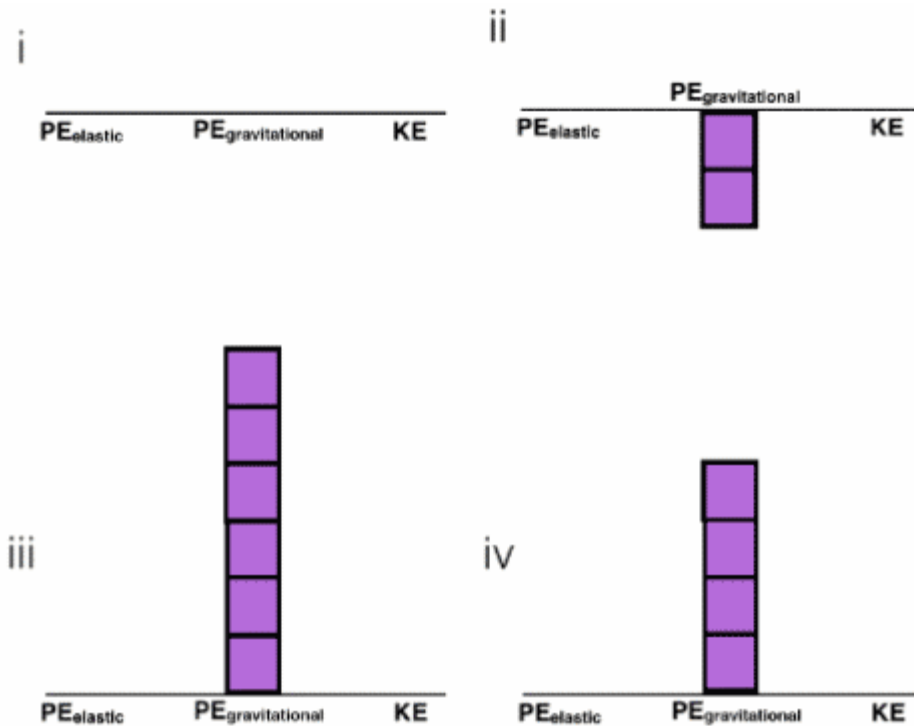


Assume that the spring is being held in place by an external force until time 1, which is the instant that this force is removed from the mass. At time 1 the system begins with exactly **6 J** of energy. Time 2 is the moment when the spring and the mass lose contact. Time 3 is the final position of the mass after it has stopped moving along the table.

# Energy Problems XV continued

Based on the diagram what are possible representations of the energy distribution of the system at **time 3**? Choose *all* that apply:

**Note:** Each block represents 1 J of energy, blocks above the line are positive energies and blocks below the line are negative energies



- A. i only
- B. iii & iv
- C. i, iii & iv
- D. i, ii & iv
- E. All answers are possible

# Solution

**Answer:** D

**Justification:** To answer this question we need to identify the possible  $PE_{elastic}$  (potential elastic energy),  $PE_{gravitational}$  (potential gravitational energy) and  $KE$  (kinetic energy) at time 3.

However, here it is important to note that some of the energy of the system **must be lost** in order for the block to come to a stop on the table. This energy is converted into heat energy due to the force of friction between the mass and the table. If no energy was lost in the system, the block would never come to a stop. This means that the total energy of the system is now smaller than 6J:

$$PE_{elastic} + PE_{gravitational} + KE < 6J$$

$PE_{elastic}$ : At time 3 the spring is no longer compressed and  $\Delta x = 0$ .  
Therefore  $PE_{elastic} = \frac{1}{2}\Delta x^2 = 0$ .

# Solution continued

$PE_{\text{gravitational}}$ : The potential energy due to gravity depends on where you choose the origin to be. Therefore,  $PE_{\text{gravitational}}$  can be negative, zero or positive because  $PE_{\text{gravitational}} = mgh$ , where  $h$  depends on where the origin is **chosen** to be.

If the origin is **above** the table  $PE_{\text{gravitational}} < 0$ , if the origin is **along** the table  $PE_{\text{gravitational}} = 0$ , and if the origin is **below** the table  $PE_{\text{gravitational}} > 0$ .

$KE$ : The equation for the kinetic energy of an object is  $KE = \frac{1}{2}mv^2$ . At time 3 we know that the velocity of the mass is zero (the mass has come to a complete stop), therefore this must mean that  $KE = 0$ .

We can discount option (iii) because it still shows 6J of energy in the system, but we know it must be less. Option (i) has zero  $PE_{\text{gravitational}}$ , option (ii) has negative  $PE_{\text{gravitational}}$  and option (iv) has positive  $PE_{\text{gravitational}}$ . Since we know  $PE_{\text{gravitational}}$  can be both zero, negative and positive, options (i), (ii) and (iv) could be true. Therefore the correct answer is **D**.